


Contar Autos en Intervalos de a 11 (G)

Rellene los espacios.



11














77




















176


















264













Contar Autos en Intervalos de a 11 (G) Respuestas

Rellene los espacios.



11



22



33



44



55



66



77



88



99



110



121



132



143



154



165



176



187



198



209



220



231



242



253



264



275



286



297



308



319



330