



*Contar Autos en Intervalos de a 11 (A)*

Rellene los espacios.



11



—



33



—



—



—



—



88



—



—



—



—



—



—



—



—



—



198



—



—



—



—



—



—



—



—



—



—



—



330

*Contar Autos en Intervalos de a 11 (A) Respuestas*

Rellene los espacios.



11



22



33



44



55



66



77



88



99



110



121



132



143



154



165



176



187



198



209



220



231



242



253



264



275



286



297



308



319



330

*Contar Autos en Intervalos de a 11 (8)*


Rellene los espacios.



11



—



33



—



—



—



—



—



—



—



—



—



—



—



—



—



—



—



—




—



—



—



—



—



—



—



—



—




—



—

*Contar Autos en Intervalos de a 11 (8) Respuestas*

Rellene los espacios.



11



22



33



44



55



66



77




88



99



110



121



132



143



154



165



176



187



198



209



220



231



242



253



264



275



286



297



308



319




330

Imagen tomada de OpenClipArt.com


*MatesLibres.com*

*Pontar Autos en Intervalos de a 11 (6)*


Rellene los espacios.



11



\_\_\_



\_\_\_



\_\_\_



\_\_\_



\_\_\_



\_\_\_



\_\_\_



\_\_\_



\_\_\_



\_\_\_



\_\_\_



\_\_\_



154



\_\_\_



176



187



\_\_\_



\_\_\_



\_\_\_



\_\_\_



\_\_\_



\_\_\_



\_\_\_



\_\_\_



\_\_\_



\_\_\_



308



\_\_\_




\_\_\_

*Contar Autos en Intervalos de a 11 (6) Respuestas*


Rellene los espacios.



11



22



33



44



55



66



77



88



99



110



121



132




143



154



165



176



187



198



209



220



231



242



253



264



275



286



297



308



319




330

Imagen tomada de OpenClipArt.com


*MatesLibres.com*

*Contar Autos en Intervalos de 11 (2)*

Rellene los espacios.



11



\_\_\_



\_\_\_



\_\_\_



\_\_\_



\_\_\_



\_\_\_



88



\_\_\_



\_\_\_



\_\_\_



\_\_\_



\_\_\_



\_\_\_



\_\_\_



176



\_\_\_



\_\_\_



\_\_\_



\_\_\_



\_\_\_



242



\_\_\_



\_\_\_



275



\_\_\_



\_\_\_



\_\_\_



319



\_\_\_

*Contar Autos en Intervalos de a 11 (∞) Respuestas*

Rellene los espacios.



11



22



33



44



55



66



77



88



99



110



121



132



143



154



165



176



187



198



209



220



231



242



253



264



275



286



297



308



319



330


Imagen tomada de OpenClipArt.com

*MatesLibres.com*




*Contar Autos en Intervalos de a 11 (E)*

Rellene los espacios.



11



22



\_\_\_



\_\_\_



\_\_\_



66



\_\_\_



\_\_\_



\_\_\_



\_\_\_



\_\_\_



\_\_\_



\_\_\_



\_\_\_



\_\_\_



\_\_\_



\_\_\_



\_\_\_



\_\_\_



\_\_\_



231



\_\_\_



\_\_\_



264



275



\_\_\_



\_\_\_



\_\_\_




\_\_\_



\_\_\_

*Contar Autos en Intervalos de a 11 (E) Respuestas*

Rellene los espacios.



11



22



33



44



55



66



77



88



99



110



121



132



143



154



165



176



187



198



209



220



231



242



253



264



275



286



297



308



319



330

*Contar Autos en Intervalos de a 11 (F)*

Rellene los espacios.



11



22



33



\_\_\_



\_\_\_



\_\_\_



\_\_\_



\_\_\_



\_\_\_



\_\_\_



121



\_\_\_



\_\_\_



\_\_\_



\_\_\_



\_\_\_



\_\_\_



198




\_\_\_



220



\_\_\_



\_\_\_



\_\_\_



\_\_\_



\_\_\_



\_\_\_



\_\_\_



\_\_\_




319



\_\_\_

*Contar Autos en Intervalos de a 11 (F) Respuestas*

Rellene los espacios.



11



22



33



44



55



66



77




88




99



110



121



132



143



154



165



176



187



198




209



220



231



242



253



264



275



286



297



308



319



330

Imagen tomada de OpenClipArt.com

MatesLibres.com

*Contar Autos en Intervalos de a 11 (G)*


Rellene los espacios.



11



\_\_\_



\_\_\_



\_\_\_



\_\_\_



\_\_\_



77



\_\_\_



\_\_\_




\_\_\_



\_\_\_



\_\_\_



\_\_\_



\_\_\_



\_\_\_



176



\_\_\_



\_\_\_



\_\_\_




\_\_\_



\_\_\_



\_\_\_



\_\_\_



264



\_\_\_



\_\_\_



\_\_\_



\_\_\_



\_\_\_



\_\_\_

*Contar Autos en Intervalos de a 11 (G) Respuestas*

Rellene los espacios.



11



22



33



44



55



66



77



88



99



110



121



132




143



154



165



176



187



198



209



220



231



242



253



264



275



286



297



308




319




330

*Contar Autos en Intervalos de a 11 (H)*

Rellene los espacios.



11



—




—




—




55



—



77




88



—



—



—



—




—



—



—



—



—



—



—



—



—



—




—



264



275



—



—



308



—



—

*Contar Autos en Intervalos de a 11 (H) Respuestas*

Rellene los espacios.



11



22



33



44



55



66



77




88



99



110



121



132



143



154



165



176



187



198



209



220



231



242



253



264



275



286



297



308



319



330



*Contar Autos en Intervalos de a 11 (7)*

Rellene los espacios.



11



\_\_\_



\_\_\_



\_\_\_



\_\_\_



\_\_\_



\_\_\_



\_\_\_



\_\_\_



\_\_\_



\_\_\_



132



\_\_\_



\_\_\_



\_\_\_



\_\_\_



\_\_\_



\_\_\_



\_\_\_



\_\_\_



\_\_\_



242



\_\_\_



\_\_\_



\_\_\_



\_\_\_



\_\_\_



\_\_\_



\_\_\_



\_\_\_

*Contar Autos en Intervalos de a 11 (7) Respuestas*

Rellene los espacios.



11



22



33



44



55



66



77



88



99



110



121



132



143



154



165



176



187



198



209



220



231



242



253



264



275



286



297



308




319




330

*Contar Autos en Intervalos de a 11 (I)*


Rellene los espacios.



11




\_\_\_




\_\_\_




\_\_\_




\_\_\_



66



77




\_\_\_




99



\_\_\_



\_\_\_




\_\_\_




143




\_\_\_



165



\_\_\_



\_\_\_




\_\_\_




\_\_\_



220



\_\_\_



\_\_\_



\_\_\_



264



\_\_\_



\_\_\_



\_\_\_



\_\_\_



\_\_\_



\_\_\_

*Contar Autos en Intervalos de a 11 (I) Respuestas*

Rellene los espacios.



11



22



33



44



55



66



77



88



99



110



121



132



143



154



165



176



187



198



209



220



231



242



253



264



275



286



297



308



319



330