

Diez Cuadros (D)

Nombre: _____

Fecha: _____

Represente el número en cada cuadrícula.

1

3

7

9

6

4

2

10

8

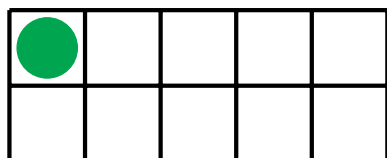
5

Diez Cuadros (D) Respuestas

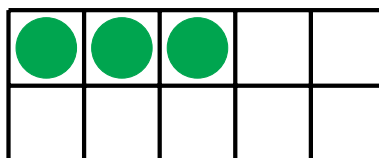
Nombre: _____

Fecha: _____

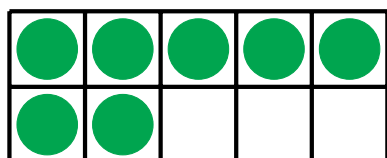
Represente el número en cada cuadrícula.




1



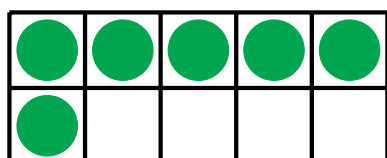
3



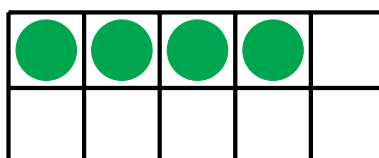
7



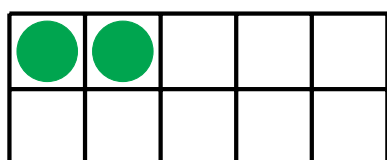
9



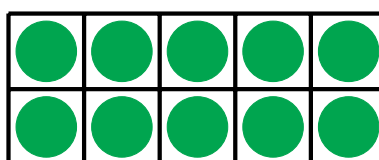
6



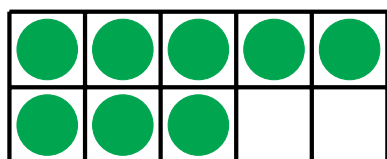
4



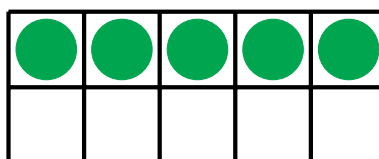
2



10



8



5