

# Diez Cuadros (E)

Nombre: \_\_\_\_\_

Fecha: \_\_\_\_\_

Represente el número en cada cuadrícula.


10


1


7


5


4


6


2


8


3



9

# Diez Cuadros (E) Respuestas

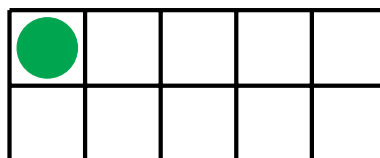
Nombre: \_\_\_\_\_

Fecha: \_\_\_\_\_

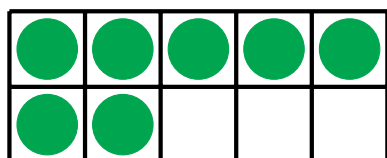
Represente el número en cada cuadrícula.



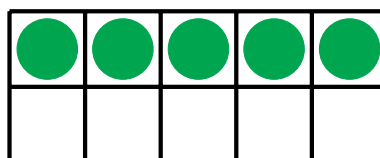
10



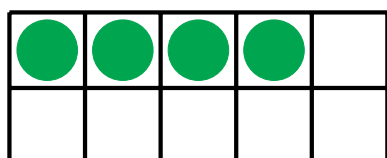
1



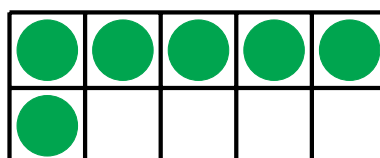
7



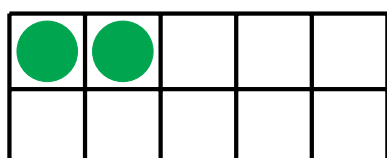
5



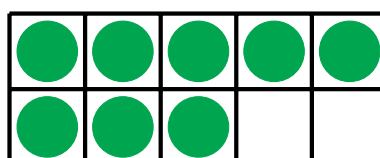
4



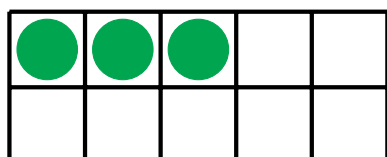
6



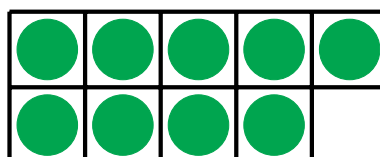
2



8



3



9