

Diez Cuadros (G)

Nombre: _____

Fecha: _____

Represente el número en cada cuadrícula.

10

4

7

5

8

9

2

1

3


6

Diez Cuadros (G) Respuestas

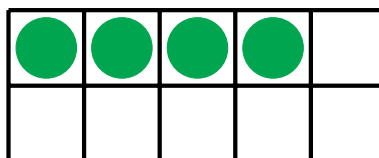
Nombre: _____

Fecha: _____

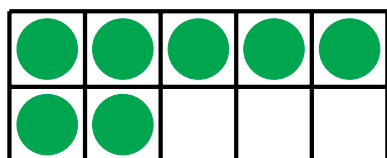
Represente el número en cada cuadrícula.



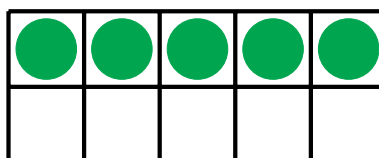
10



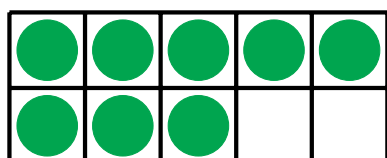
4



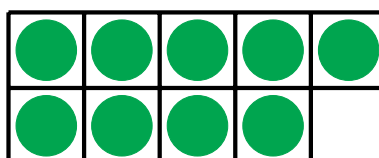
7



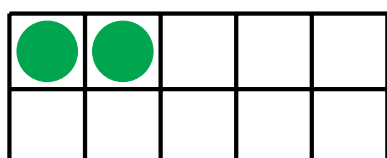
5



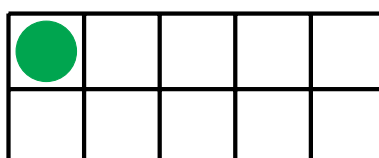
8



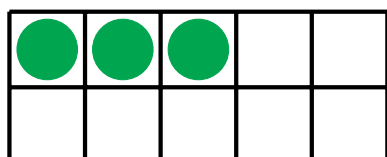
9



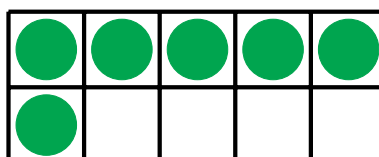
2



1



3



6