

Diez Cuadros (A)

Nombre: _____

Fecha: _____

Represente el número en cada cuadrícula.

5

3

10

2

1

4

9

7

8

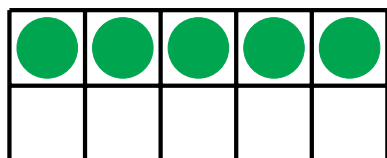
6

Diez Cuadros (A) Respuestas

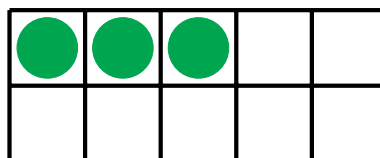
Nombre: _____

Fecha: _____


Represente el número en cada cuadrícula.



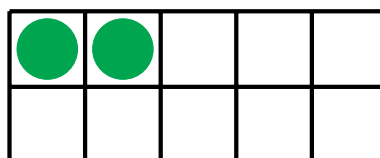
5



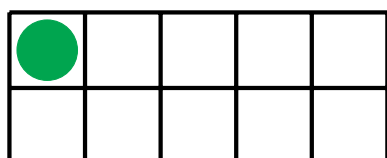
3



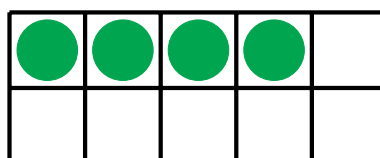
10




2



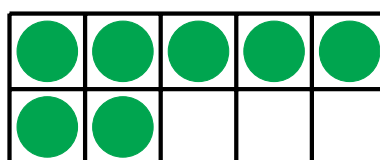
1



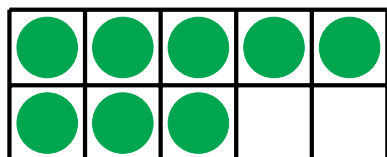
4



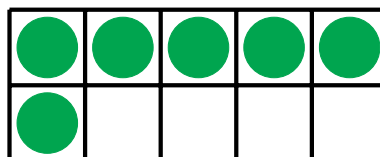
9



7



8



6

Diez Cuadros (B)

Nombre: _____

Fecha: _____

Represente el número en cada cuadrícula.

3

10

4

7

9

8

1

5

2

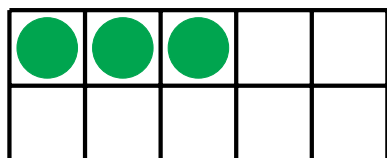
6

Diez Cuadros (B) Respuestas


Nombre: _____

Fecha: _____

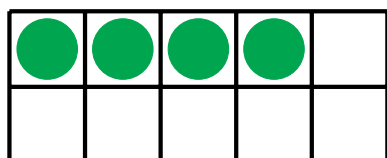
Represente el número en cada cuadrícula.



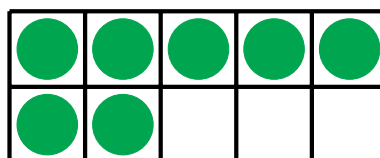
3




10



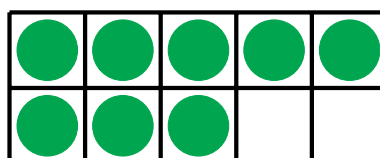
4



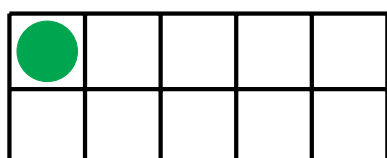
7



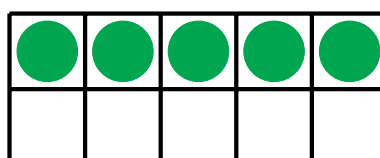
9



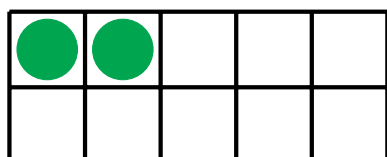
8



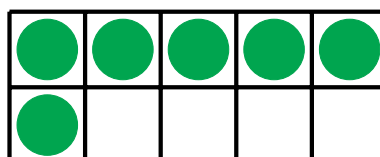
1



5



2



6

Diez Cuadros (C)

Nombre: _____

Fecha: _____

Represente el número en cada cuadrícula.

7

9

1

6

3

4

8

10

2

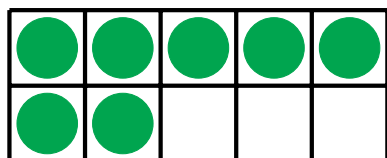
5

Diez Cuadros (C) Respuestas


Nombre: _____

Fecha: _____

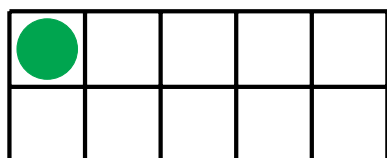
Represente el número en cada cuadrícula.



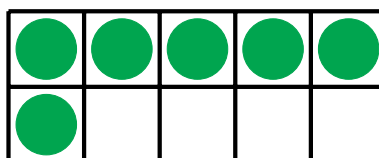
7



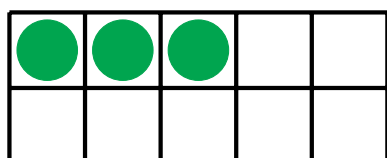
9



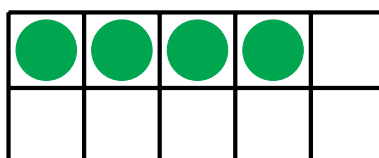
1



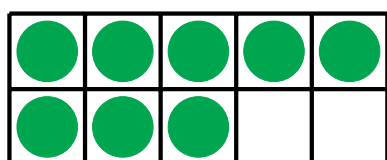
6



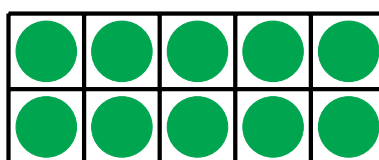
3




4



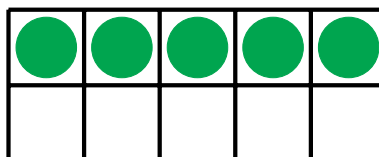
8



10



2



5

Diez Cuadros (D)

Nombre: _____

Fecha: _____

Represente el número en cada cuadrícula.

1

3

7

9

6

4

2

10

8

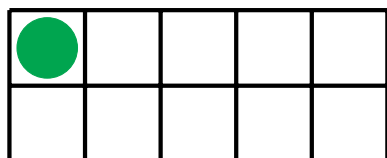
5

Diez Cuadros (D) Respuestas

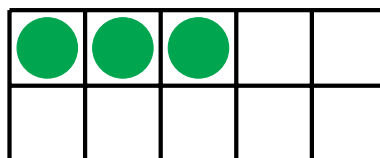
Nombre: _____

Fecha: _____

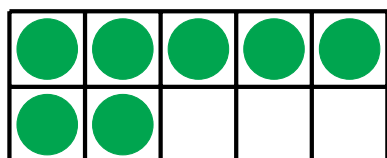
Represente el número en cada cuadrícula.




1



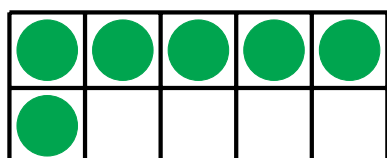
3



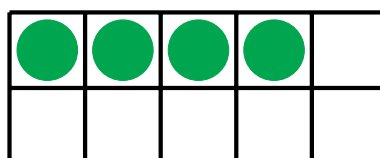
7



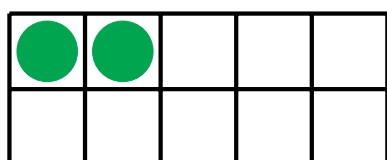
9



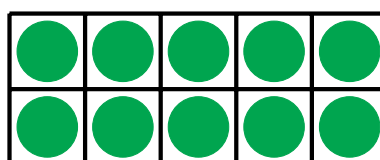
6



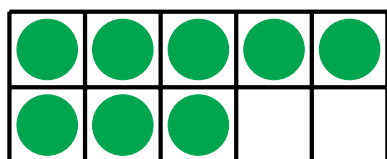
4



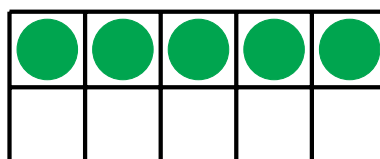
2



10



8



5

Diez Cuadros (E)

Nombre: _____

Fecha: _____

Represente el número en cada cuadrícula.

10

1

7

5

4

6

2

8

3


9

Diez Cuadros (E) Respuestas

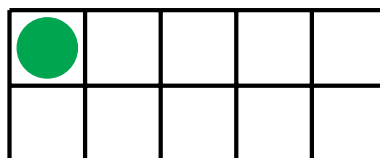
Nombre: _____

Fecha: _____

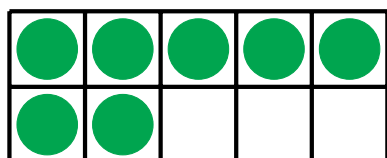
Represente el número en cada cuadrícula.



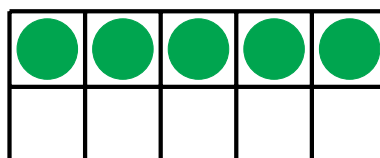
10



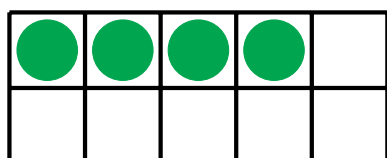
1



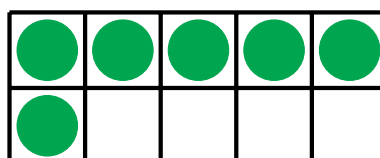
7



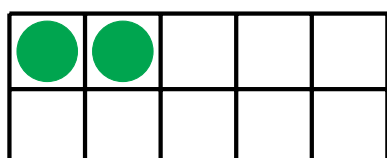
5



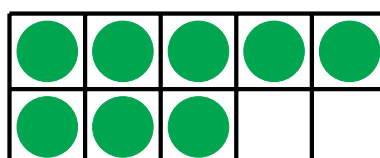
4



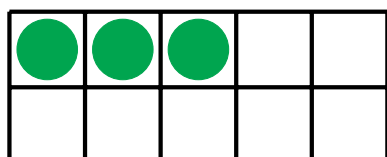
6



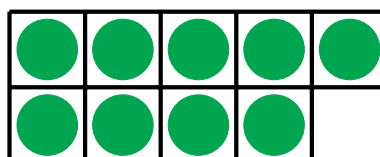
2



8



3



9

Diez Cuadros (F)

Nombre: _____

Fecha: _____

Represente el número en cada cuadrícula.

8

7

2

3

1

4

5

6

9

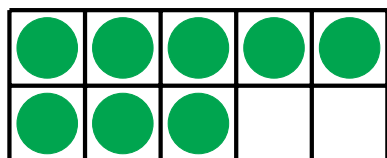
10

Diez Cuadros (F) Respuestas

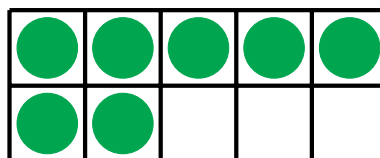
Nombre: _____

Fecha: _____

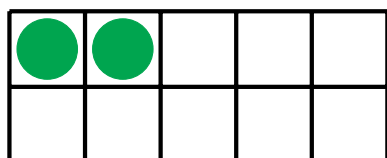
Represente el número en cada cuadrícula.



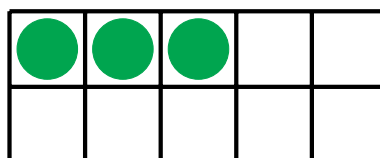
8



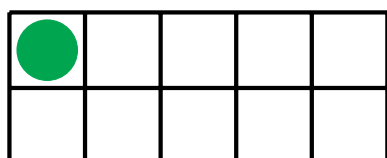
7



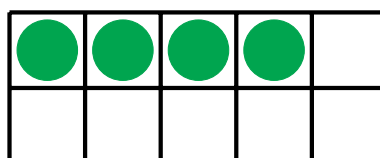
2



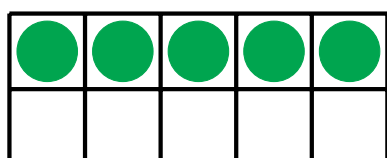
3



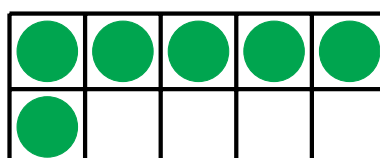
1




4



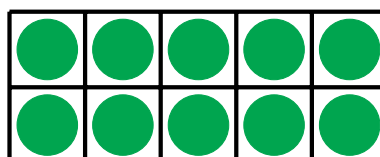
5



6



9



10

Diez Cuadros (G)

Nombre: _____

Fecha: _____

Represente el número en cada cuadrícula.

10

4

7

5

8

9

2

1

3


6

Diez Cuadros (G) Respuestas

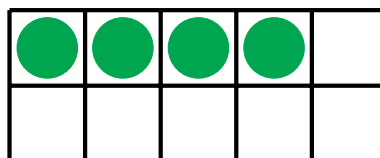
Nombre: _____

Fecha: _____

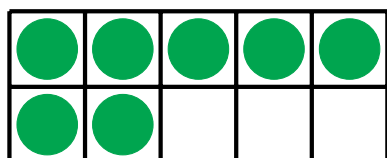
Represente el número en cada cuadrícula.



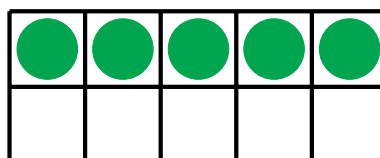
10



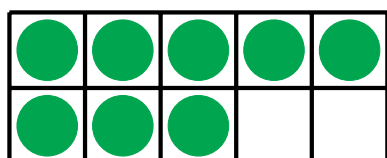
4



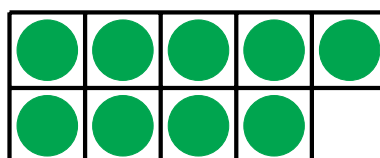
7



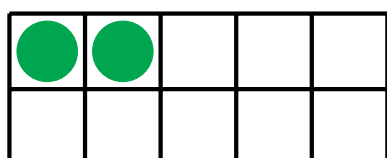
5



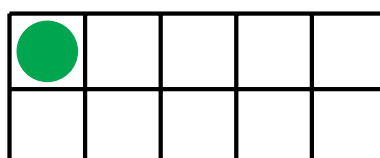
8



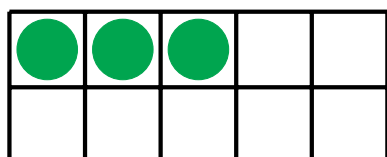
9



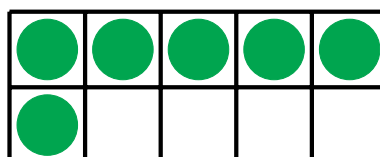
2



1



3



6

Diez Cuadros (H)

Nombre: _____

Fecha: _____

Represente el número en cada cuadrícula.

1

8

4

7

6

5

2

3

10

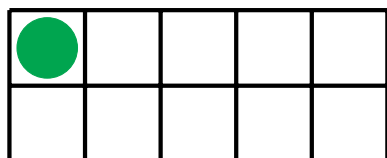
9

Diez Cuadros (H) Respuestas

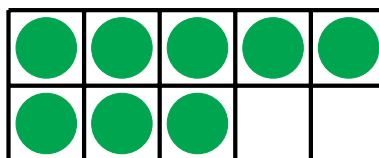
Nombre: _____

Fecha: _____

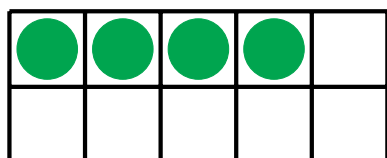
Represente el número en cada cuadrícula.



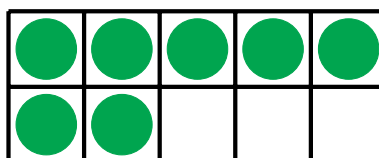
1



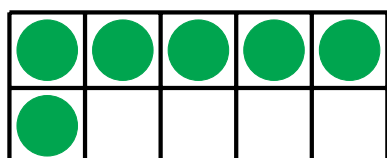
8



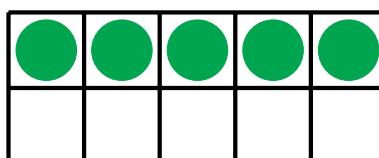
4



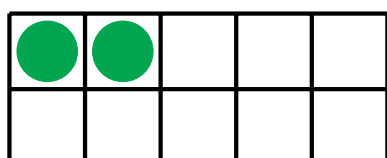
7



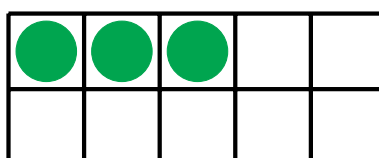
6




5



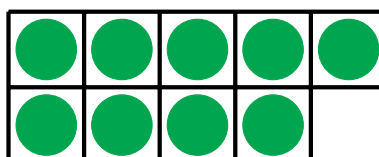
2



3



10



9

Diez Cuadros (I)

Nombre: _____

Fecha: _____

Represente el número en cada cuadrícula.

8

2

5

1

3

10

7

4

6

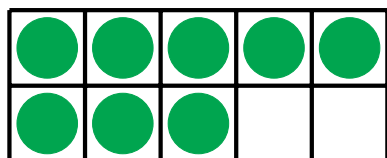
9

Diez Cuadros (I) Respuestas

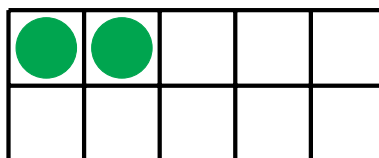
Nombre: _____

Fecha: _____

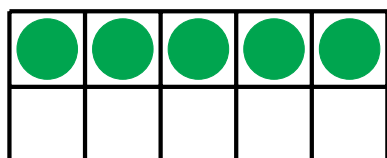
Represente el número en cada cuadrícula.



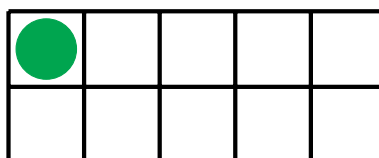
8



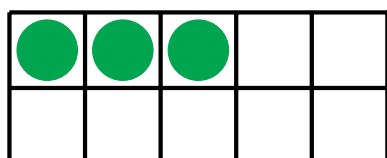
2



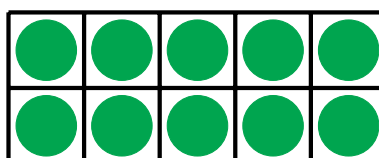
5



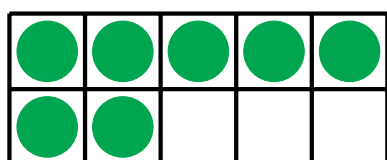
1



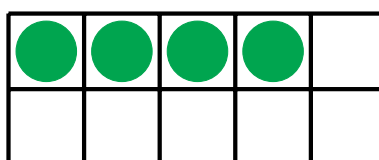
3



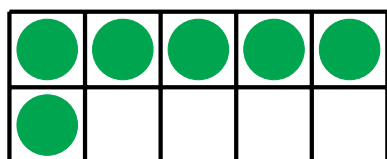
10




7



4



6



9

Diez Cuadros (J)

Nombre: _____

Fecha: _____

Represente el número en cada cuadrícula.

10

1

5

7

2

6

8

3

4


9

Diez Cuadros (J) Respuestas

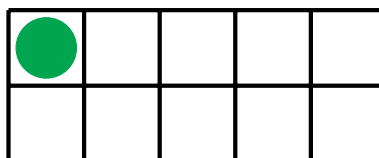
Nombre: _____

Fecha: _____

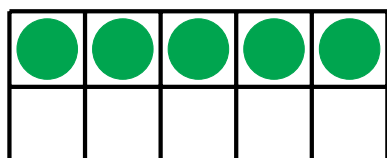
Represente el número en cada cuadrícula.



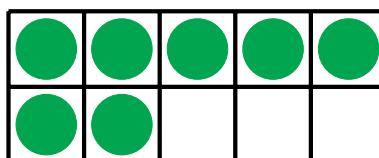
10



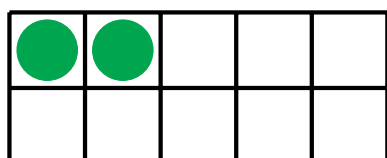
1



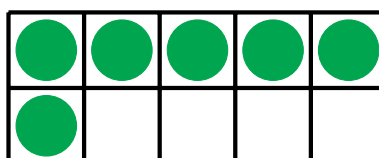
5



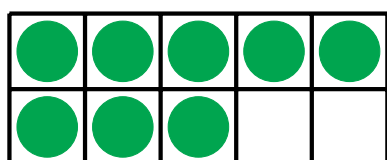
7



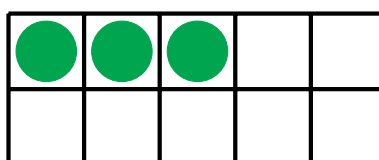
2



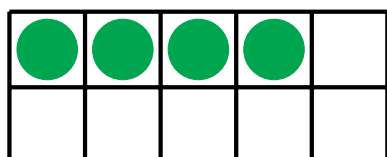
6



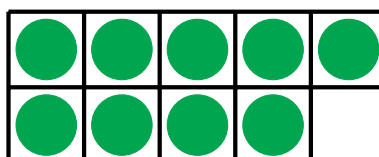
8



3



4



9