

Diez Cuadros (A)

Nombre: _____

Fecha: _____

Represente el número en cada cuadrícula.

10

9

8

7

6

5

4

3

2


1

Diez Cuadros (A) Respuestas


Nombre: _____

Fecha: _____

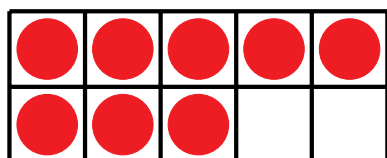
Represente el número en cada cuadrícula.



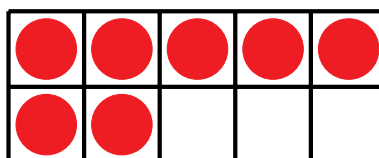
10



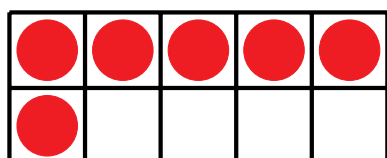
9



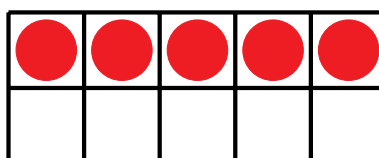
8



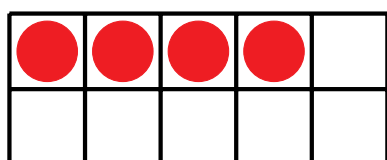
7



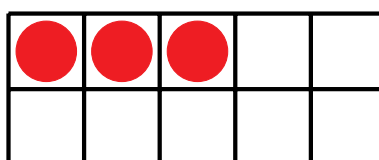
6



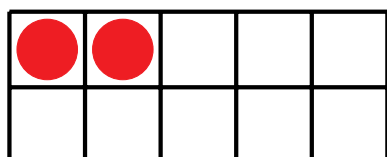
5



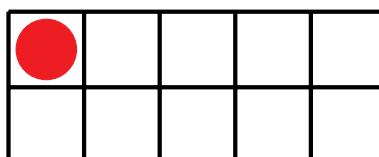
4



3



2



1