


# Dibujar la Hora en Relojes Analógicos (H)

Nombre: \_\_\_\_\_

Fecha: \_\_\_\_\_

Dibuje cada hora en el reloj que tiene encima.

1.





Medianoche



Mediodía

4:00:30 AM

2.





Mediodía



Medianoche

7:31:55 PM

3.




Mediodía



Medianoche

5:07:00 PM

4.



Medianoche



Mediodía

11:17:20 AM


# Dibujar la Hora en Relojes Analógicos (H) Respuestas

Nombre: \_\_\_\_\_

Fecha: \_\_\_\_\_

Dibuje cada hora en el reloj que tiene encima.

1.

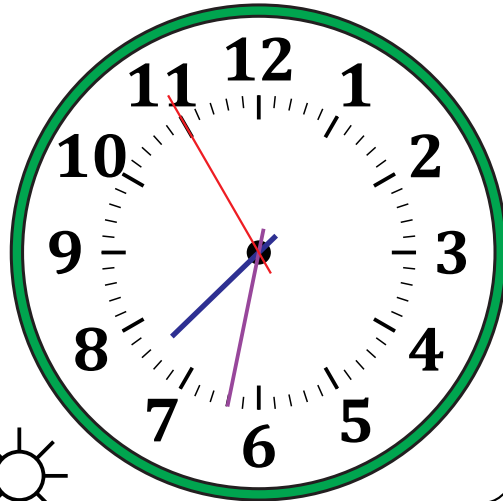


  
Medianoche

4:00:30 AM

  
Mediodía

2.

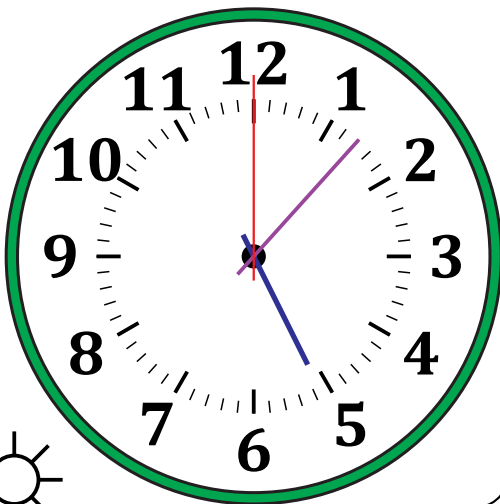


  
Mediodía

7:31:55 PM

  
Medianoche

3.




  
Mediodía

5:07:00 PM

  
Medianoche

4.



  
Medianoche

11:17:20 AM

  
Mediodía