



Dibujar la Hora en Relojes Analógicos (B)


Nombre: _____


Fecha: _____


Dibuje cada hora en el reloj que tiene encima.


1. 
Mediodía 13:32:26 Medianoche


2. 
Medianoche 09:02:08 Mediodía


3. 
Mediodía 21:17:50 Medianoche


4. 
Medianoche 06:41:09 Mediodía


5. 
Mediodía 15:24:28 Medianoche


6. 
Medianoche 11:05:46 Mediodía


7. 
Medianoche 04:36:04 Mediodía

8. 
Mediodía 16:40:28 Medianoche

9. 
Mediodía 19:27:12 Medianoche

10. 
Medianoche 03:33:09 Mediodía

11. 
Medianoche 01:54:22 Mediodía

12. 
Mediodía 22:00:33 Medianoche

Dibujar la Hora en Relojes Analógicos (B) Respuestas

Nombre: _____

Fecha: _____

Dibuje cada hora en el reloj que tiene encima.

