


# Leer la Hora en Relojes Analógicos (E)

Nombre: \_\_\_\_\_

Fecha: \_\_\_\_\_

Lea cada hora y escríbala en el espacio debajo del reloj.

1.



Mediodía



Medianoche

\_\_\_\_\_

2.




Medianoche



Mediodía

\_\_\_\_\_

3.




Medianoche



Mediodía

\_\_\_\_\_

4.



Mediodía



Medianoche

\_\_\_\_\_

5.




Mediodía



Medianoche

\_\_\_\_\_

6.




Medianoche



Mediodía

\_\_\_\_\_

7.




Mediodía



Medianoche

\_\_\_\_\_

8.



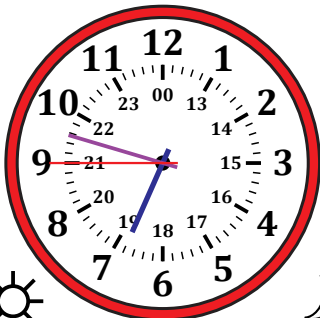
Mediodía



Medianoche

\_\_\_\_\_

9.




Mediodía



Medianoche

\_\_\_\_\_

10.




Medianoche



Mediodía

\_\_\_\_\_

11.




Medianoche



Mediodía

\_\_\_\_\_

12.



Medianoche



Mediodía

\_\_\_\_\_


# Leer la Hora en Relojes Analógicos (E) Respuestas

Nombre: \_\_\_\_\_

Fecha: \_\_\_\_\_

Lea cada hora y escríbala en el espacio debajo del reloj.


1.



23:23:20



2.




Medianoche

04:18:40



3.




Medianoche

07:17:00



4.



12:37:55




5.



16:25:35



6.




Medianoche

03:55:15




7.



15:41:10




8.



21:20:05




9.



18:47:45




10.



01:18:30




11.



09:12:25



12.



10:52:50

