


Leer la Hora en Relojes Analógicos (I)

Nombre: _____

Fecha: _____

Lea cada hora y escríbala en el espacio debajo del reloj.

1.




Mediodía



Medianoche

2.




Medianoche



Mediodía

3.

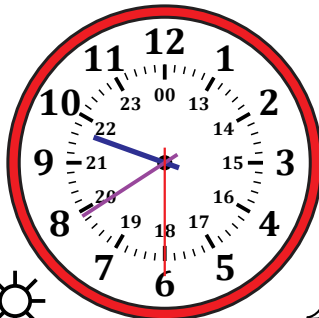


Medianoche



Mediodía

4.




Mediodía



Medianoche

5.




Medianoche



Mediodía

6.




Mediodía



Medianoche

7.




Mediodía



Medianoche

8.




Medianoche



Mediodía

9.




Mediodía



Medianoche

10.




Medianoche



Mediodía

11.




Mediodía



Medianoche

12.



Medianoche




Mediodía


Leer la Hora en Relojes Analógicos (I) Respuestas


Nombre: _____


Fecha: _____


Lea cada hora y escríbala en el espacio debajo del reloj.


1. 
 Mediodía 14:13:30 Medianoche


2. 
 Medianoche 08:55:15 Mediodía

3. 
 Medianoche 07:59:00 Mediodía


4. 
 Mediodía 21:39:30 Medianoche


5. 
 Medianoche 11:55:15 Mediodía


6. 
 Mediodía 19:41:00 Medianoche


7. 
 Mediodía 16:45:45 Medianoche

8. 
 Medianoche 00:13:00 Mediodía

9. 
 Mediodía 22:21:30 Medianoche

10. 
 Medianoche 04:13:15 Mediodía

11. 
 Mediodía 12:45:45 Medianoche

12. 
 Medianoche 03:55:45 Mediodía