


# Leer la Hora en Relojes Analógicos (C)

Nombre: \_\_\_\_\_

Fecha: \_\_\_\_\_

Lea cada hora y escríbala en el espacio debajo del reloj.

1.




Mediodía

Medianoche

\_\_\_\_\_

2.




Mediodía

Medianoche

\_\_\_\_\_

3.




Medianoche

Mediodía

\_\_\_\_\_

4.




Medianoche

Mediodía

\_\_\_\_\_

5.




Medianoche

Mediodía

\_\_\_\_\_

6.




Mediodía

Medianoche

\_\_\_\_\_

7.




Mediodía

Medianoche

\_\_\_\_\_

8.




Medianoche

Mediodía

\_\_\_\_\_

9.




Mediodía

Medianoche

\_\_\_\_\_

10.




Medianoche

Mediodía

\_\_\_\_\_

11.




Medianoche

Mediodía

\_\_\_\_\_

12.



Mediodía

Medianoche

\_\_\_\_\_


# Leer la Hora en Relojes Analógicos (C) Respuestas

Nombre: \_\_\_\_\_

Fecha: \_\_\_\_\_

Lea cada hora y escríbala en el espacio debajo del reloj.


1.



18:03:00




2.



23:44:30



3.



00:15:30



4.




Medianoche

03:35:00

Mediodía

5.




Medianoche

11:32:30

Mediodía

6.




Mediodía

13:24:00

Medianoche

7.




Mediodía

16:33:30

Medianoche

8.




Medianoche

09:22:30

Mediodía

9.




Mediodía

21:11:30

Medianoche

10.




Medianoche

07:59:00

Mediodía

11.




Medianoche

04:33:00

Mediodía

12.



Mediodía

15:38:00

Medianoche