


# Leer la Hora en Relojes Analógicos (J)

Nombre: \_\_\_\_\_

Fecha: \_\_\_\_\_

Lea cada hora y escríbala en el espacio debajo del reloj.

1.




Mediodía



Medianoche

\_\_\_\_\_

2.




Medianoche



Mediodía

\_\_\_\_\_

3.




Medianoche



Mediodía

\_\_\_\_\_

4.




Medianoche



Mediodía

\_\_\_\_\_

5.




Mediodía



Medianoche

\_\_\_\_\_

6.




Medianoche



Mediodía

\_\_\_\_\_

7.




Mediodía



Medianoche

\_\_\_\_\_

8.




Mediodía



Medianoche

\_\_\_\_\_

9.



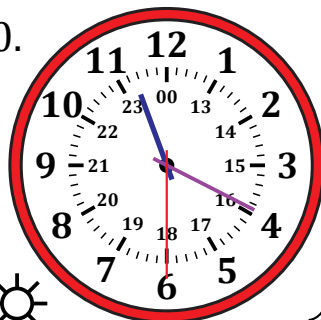
Medianoche



Mediodía

\_\_\_\_\_

10.




Mediodía



Medianoche

\_\_\_\_\_

11.



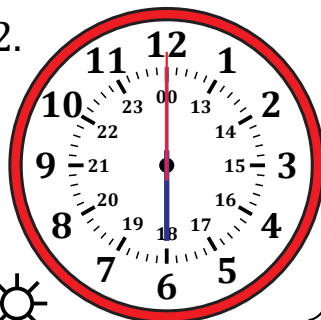
Medianoche



Mediodía

\_\_\_\_\_

12.



Mediodía



Medianoche

\_\_\_\_\_

# Leer la Hora en Relojes Analógicos (J) Respuestas

Nombre: \_\_\_\_\_

Fecha: \_\_\_\_\_

Lea cada hora y escríbala en el espacio debajo del reloj.

