


# Leer la Hora en Relojes Analógicos (G)

Nombre: \_\_\_\_\_

Fecha: \_\_\_\_\_

Lea cada hora y escríbala en el espacio debajo del reloj.

1.




Mediodía




Medianoche

\_\_\_\_\_

2.





Medianoche



Mediodía

\_\_\_\_\_

3.




Mediodía




Medianoche

\_\_\_\_\_

4.



Medianoche



Mediodía

\_\_\_\_\_


# Leer la Hora en Relojes Analógicos (G) Respuestas

Nombre: \_\_\_\_\_

Fecha: \_\_\_\_\_

Lea cada hora y escríbala en el espacio debajo del reloj.

1.




Mediodía

12:00 PM

Medianoche

2.




Medianoche

12:00 AM

Mediodía

3.




Mediodía

11:00 PM

Medianoche

4.



Medianoche

8:00 AM

Mediodía