

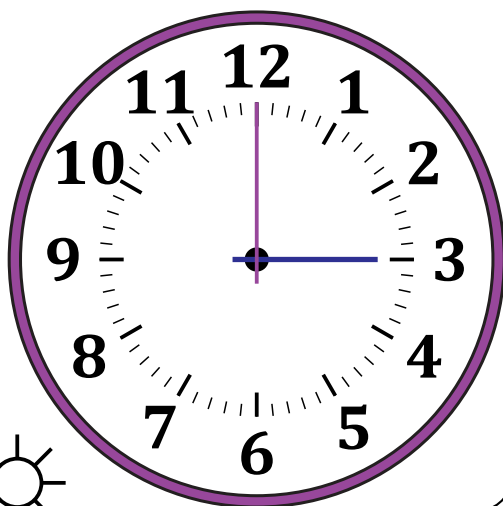
# Leer la Hora en Relojes Analógicos (I)

Nombre: \_\_\_\_\_

Fecha: \_\_\_\_\_

Lea cada hora y escríbala en el espacio debajo del reloj.

1.



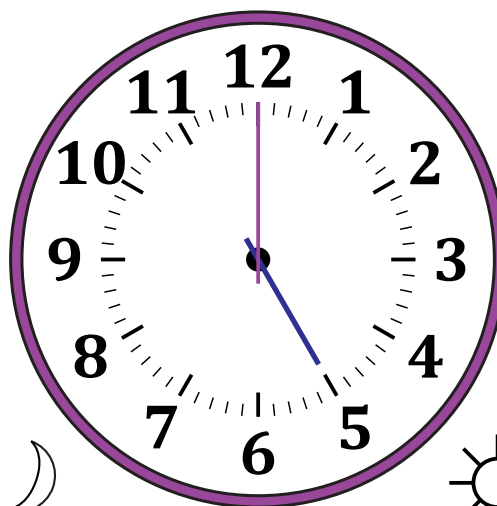
Mediodía



Medianoche

\_\_\_\_\_

2.




Medianoche




Mediodía

\_\_\_\_\_

3.




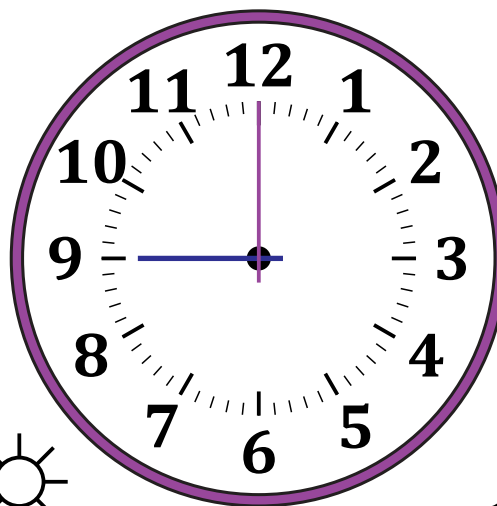
Medianoche



Mediodía

\_\_\_\_\_

4.



Mediodía



Medianoche

\_\_\_\_\_

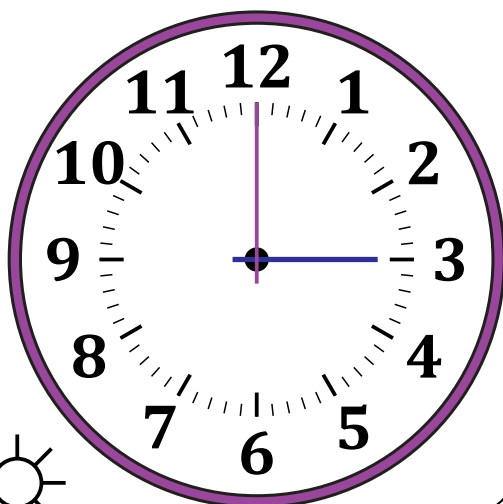
# Leer la Hora en Relojes Analógicos (J) Respuestas

Nombre: \_\_\_\_\_

Fecha: \_\_\_\_\_

Lea cada hora y escríbala en el espacio debajo del reloj.

1.



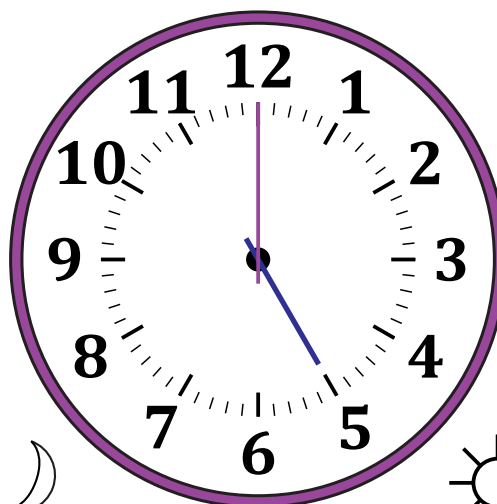
Mediodía

3:00 PM



Medianoche

2.




Medianoche

5:00 AM



Mediodía

3.




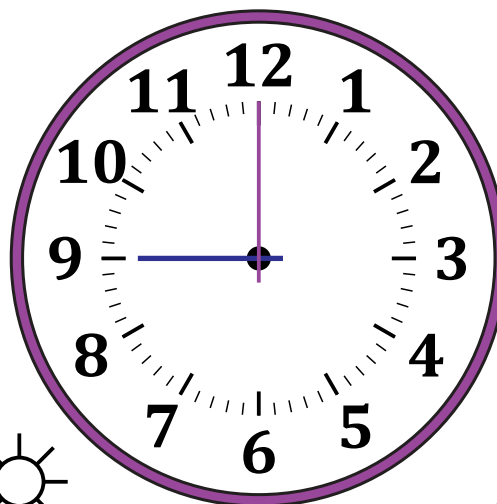
Medianoche

11:00 AM



Mediodía

4.



Mediodía

9:00 PM



Medianoche