


# Leer la Hora en Relojes Analógicos (F)

Nombre: \_\_\_\_\_

Fecha: \_\_\_\_\_

Lea cada hora y escríbala en el espacio debajo del reloj.

1.




Mediodía



Medianoche

\_\_\_\_\_

2.




Mediodía



Medianoche

\_\_\_\_\_

3.




Mediodía



Medianoche

\_\_\_\_\_

4.




Medianoche



Mediodía

\_\_\_\_\_

5.




Mediodía



Medianoche

\_\_\_\_\_

6.




Medianoche



Mediodía

\_\_\_\_\_

7.




Mediodía



Medianoche

\_\_\_\_\_

8.




Medianoche



Mediodía

\_\_\_\_\_

9.




Medianoche



Mediodía

\_\_\_\_\_

10.




Medianoche



Mediodía

\_\_\_\_\_

11.




Mediodía



Medianoche

\_\_\_\_\_

12.



Medianoche



Mediodía

\_\_\_\_\_

# Leer la Hora en Relojes Analógicos (F) Respuestas

Nombre: \_\_\_\_\_

Fecha: \_\_\_\_\_

Lea cada hora y escríbala en el espacio debajo del reloj.

1.



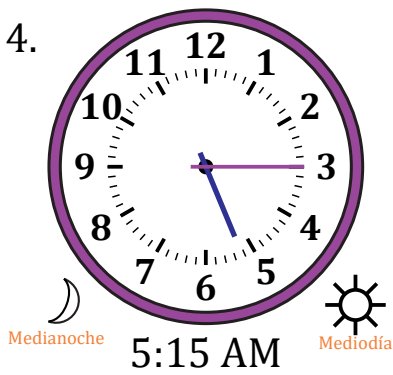
2.



3.



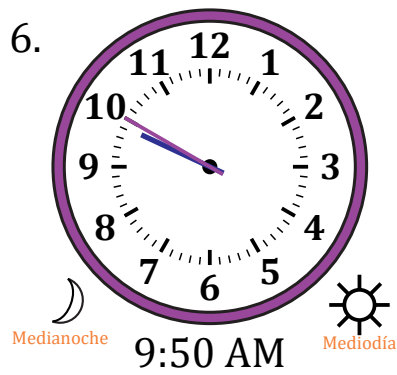
4.



5.



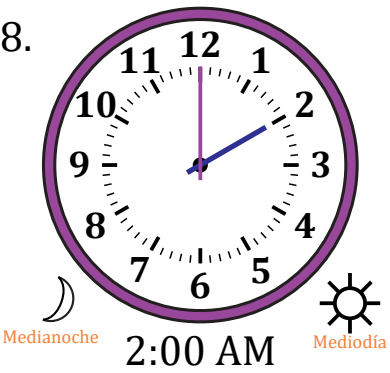
6.



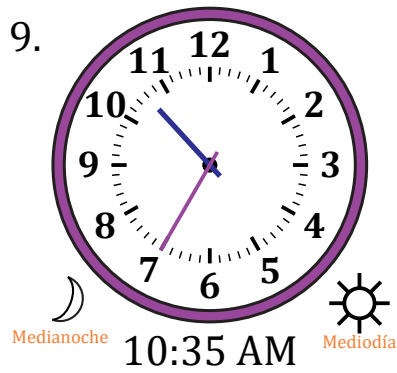
7.



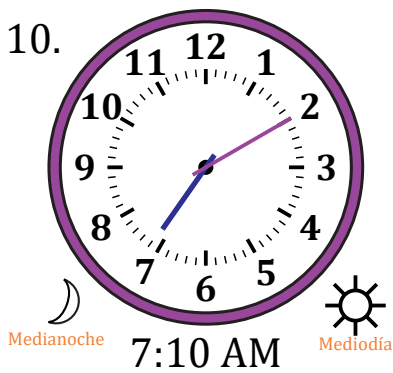
8.




9.



10.



11.



12.

