


# Leer la Hora en Relojes Analógicos (F)

Nombre: \_\_\_\_\_

Fecha: \_\_\_\_\_

Lea cada hora y escríbala en el espacio debajo del reloj.

1.





Mediodía



Medianoche

\_\_\_\_\_

2.




Mediodía



Medianoche

\_\_\_\_\_

3.




Medianoche



Mediodía

\_\_\_\_\_

4.



Medianoche



Mediodía

\_\_\_\_\_


# Leer la Hora en Relojes Analógicos (F) Respuestas

Nombre: \_\_\_\_\_

Fecha: \_\_\_\_\_

Lea cada hora y escríbala en el espacio debajo del reloj.

1.





Mediodía

22:00



Medianoche

2.



Mediodía

17:00




Medianoche

3.




Medianoche

01:00




Mediodía

4.



Medianoche

08:00



Mediodía