


Leer la Hora en Relojes Analógicos (B)

Nombre: _____

Fecha: _____

Lea cada hora y escríbala en el espacio debajo del reloj.

1.




Mediodía



Medianoche

2.




Medianoche



Mediodía

3.




Mediodía



Medianoche

4.




Mediodía



Medianoche

5.




Mediodía



Medianoche

6.




Medianoche



Mediodía

7.




Mediodía



Medianoche

8.




Mediodía



Medianoche

9.




Medianoche



Mediodía

10.




Medianoche



Mediodía

11.




Medianoche



Mediodía

12.



Medianoche



Mediodía


Leer la Hora en Relojes Analógicos (B) Respuestas

Nombre: _____

Fecha: _____

Lea cada hora y escríbala en el espacio debajo del reloj.

1.




Mediodía

12:04:53



Medianoche

2.




Medianoche

08:53:41



Mediodía

3.




Mediodía

21:35:40



Medianoche

4.



Mediodía

14:04:34



Medianoche

5.




Mediodía

22:54:55



Medianoche

6.




Medianoche

05:56:26



Mediodía

7.




Mediodía

17:56:42



Medianoche

8.




Mediodía

19:56:46



Medianoche

9.




Medianoche

11:29:28



Mediodía

10.




Medianoche

01:11:55



Mediodía

11.




Medianoche

03:25:23



Mediodía

12.



Medianoche

07:56:24



Mediodía