



Leer la Hora en Relojes Analógicos (D)


Nombre: _____


Fecha: _____


Lea cada hora y escríbala en el espacio debajo del reloj.


1. 
Mediodía Medianoche


2. 
Medianoche Mediodía


3. 
Mediodía Medianoche


4. 
Mediodía Medianoche


5. 
Medianoche Mediodía


6. 
Medianoche Mediodía


7. 
Medianoche Mediodía

8. 
Mediodía Medianoche

9. 
Medianoche Mediodía

10. 
Mediodía Medianoche

11. 
Mediodía Medianoche

12. 
Medianoche Mediodía

Leer la Hora en Relojes Analógicos (D) Respuestas

Nombre: _____

Fecha: _____

Lea cada hora y escríbala en el espacio debajo del reloj.

