


Leer la Hora en Relojes Analógicos (F)

Nombre: _____

Fecha: _____

Lea cada hora y escríbala en el espacio debajo del reloj.

1.




Mediodía



Medianoche

2.




Mediodía



Medianoche

3.




Medianoche



Mediodía

4.




Medianoche



Mediodía

5.




Mediodía



Medianoche

6.




Medianoche



Mediodía

7.




Mediodía



Medianoche

8.




Mediodía



Medianoche

9.

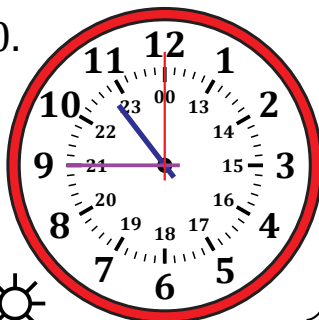


Medianoche



Mediodía

10.




Mediodía



Medianoche

11.




Medianoche



Mediodía

12.



Medianoche



Mediodía


Leer la Hora en Relojes Analógicos (F) Respuestas

Nombre: _____

Fecha: _____

Lea cada hora y escríbala en el espacio debajo del reloj.

1.




Mediodía

13:23:15



Medianoche

2.




Mediodía

16:06:30



Medianoche

3.




Medianoche

07:43:00



Mediodía

4.




Medianoche

02:08:45



Mediodía

5.




Mediodía

18:23:45



Medianoche

6.




Medianoche

10:11:15



Mediodía

7.




Mediodía

20:10:15



Medianoche

8.




Mediodía

14:02:30



Medianoche

9.




Medianoche

01:32:00



Mediodía

10.




Mediodía

22:45:00



Medianoche

11.




Medianoche

08:12:45



Mediodía

12.



Medianoche

04:12:30



Mediodía