


# Leer la Hora en Relojes Analógicos (G)

Nombre: \_\_\_\_\_

Fecha: \_\_\_\_\_

Lea cada hora y escríbala en el espacio debajo del reloj.

1.




Mediodía

Medianoche

\_\_\_\_\_

2.




Mediodía

Medianoche

\_\_\_\_\_

3.




Mediodía

Medianoche

\_\_\_\_\_

4.




Medianoche

Mediodía

\_\_\_\_\_

5.




Medianoche

Mediodía

\_\_\_\_\_

6.




Medianoche

Mediodía

\_\_\_\_\_

7.




Mediodía

Medianoche

\_\_\_\_\_

8.




Medianoche

Mediodía

\_\_\_\_\_

9.




Mediodía

Medianoche

\_\_\_\_\_

10.




Medianoche

Mediodía

\_\_\_\_\_

11.




Medianoche

Mediodía

\_\_\_\_\_

12.



Mediodía

Medianoche

\_\_\_\_\_

# Leer la Hora en Relojes Analógicos (G) Respuestas

Nombre: \_\_\_\_\_

Fecha: \_\_\_\_\_

Lea cada hora y escríbala en el espacio debajo del reloj.

